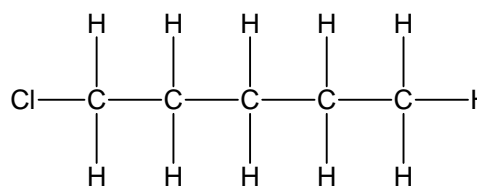
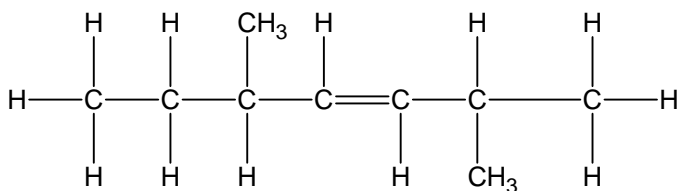
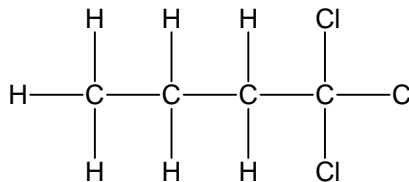
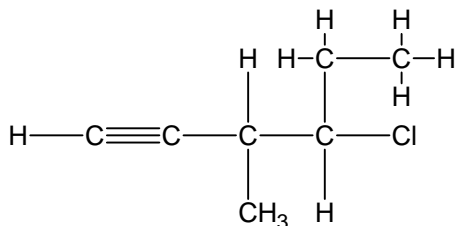


## HYDROCARBON NOMENCLATURE

Name the following hydrocarbons:



Draw the following hydrocarbons:

2,3,3-trimethyl-1-hexene

1,2-difluoroethane

3-chloro-1-butene

2-methyl-1,3-butadiene

6-ethyl-5,7-dimethyl-1-octene